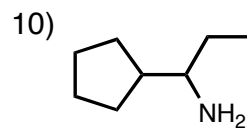
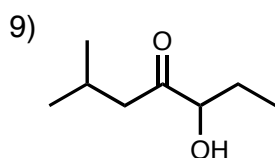
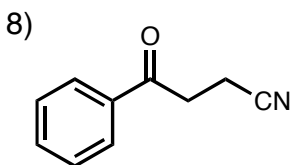
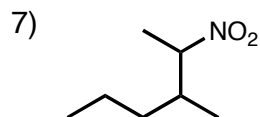
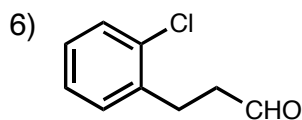
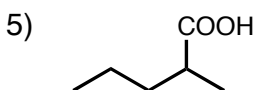
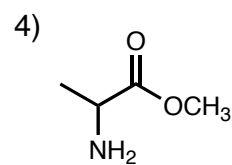
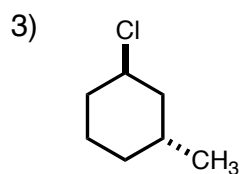
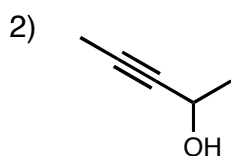
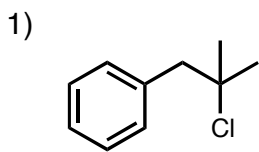


14. 次の化合物 1)~10)を IUPAC 名で命名せよ。また、化合物 11)~20)の構造式を示せ。



11) hept-1-ene

12) oct-3-yne

13) 3-phenylpropanal

14) 4-methylhexan-3-ol

15) 2-methylhexan-3-one

16) 1-ethyl-2-methylbenzene

17) methyl 2-methyl-3-oxobutanoate

18) 2-phenylpropanenitrile

19) 2-methyl-2-nitropentane

20) *cis*-2-hydroxycyclohexanecarboxylic acid